



MASTER CARES CHRISTIAN SCHOOL

Term one COVID-19 Holiday package, 2020.

Primary Four Social Studies

NAME: _____

SECTION A (40 Marks)

1. Name any one component of the environment.
.....
2. Give the service which we get from school.
.....
3. Write down one type of weather.
.....
4. Give one danger of sunshine to people.
.....
5. Which instrument is used to show the direction of places?
.....
6. State any one role of a father at home.
.....
7. Mention any one material used to construct a semi-permanent house.
.....
8. Give one source of basic needs to man.
.....
9. Why do people in highland areas terrace their land?
.....
10. Mention the social service provided by dogs at home.
.....
11. Give any one reason why people keep domestic animals at home.
.....
12. Write B.O.U in full.
.....
13. Name one traditional mean of communication.
.....
14. Mention any one example of a community.
.....
15. Give any one importance of important places.
.....
16. Write down one example of a physical feature.
.....
17. Name the place where people keep their money safe.
.....
18. Suggest one use of trees on the school compound.
.....
19. Mention one craft material got from swamps.
.....
20. Name any one tool used by the police in doing their work.
.....

-
21. State any one cause of accidents at school.
.....
22. In which district do we find the international airport of Uganda?
.....
23. Give one activity done by people in your community.
.....
24. Name the landform between the two hills or mountains.
.....
25. State one duty of prefects at school.
.....
26. Which colour on the Uganda flag represents sunshine?
.....
27. Draw the map of a pot in the space below.
.....
-
28. Name the ministry where all schools belong in Uganda.
.....
29. Give any one use of crops to people.
.....
30. How is a doctor important in your community?
.....
31. Mention any one product got from milk.
.....
32. What do we call a drawing of an object as seen from above?
.....
33. Which part of the sugarcane is eaten by people?
.....
34. Write down any one type of clouds.
.....
35. Which type of clouds gives us rainfall?
.....

For questions 36-40 answer Either Christianity Or Islam BUT NOT both.

36. Either: Name the garden where Adam and Eve live after creation.
.....
Or: Name the garden where Adam and Hawa live after creation.
.....
37. Either: Mention any one leader in the Church.
.....
Or: Mention any one leader in the Mosque.
.....
38. Either: How long did it take God to create the universe?
.....

.....
Or: How long did it take Allah to create the universe?

.....
39. Either: Give one reason why Christians pray to God?

.....
Or: Give one reason why Muslims pray to Allah?

.....
40. Either: Give one way how a Christian child can show love to others.

.....
Or: Give one way how a Muslim child can show love to others.
.....

SECTION B (60Marks)

41. (a) What is vegetation?

.....
.....

(b) Give any two importance of vegetation to people.

- i.
- ii.

42. (a) Mention any two types of leaders.

- i.
- ii.

(b) State any two qualities of a good leader.

- i.
- ii.

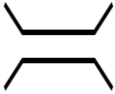
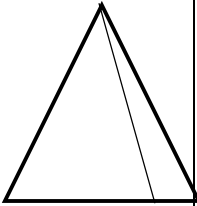

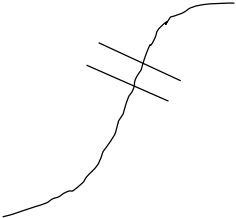
43. (a) Write down any two examples of craft items.

- i.
- ii.

(b) Give any two uses of craft items at home.

- i.
- ii.

44. Name the map symbols drawn below.

45. (a) Write any one activity done by farmers in;

- i. Dry season.....
- ii. Rainy season.....

(b) Mention any two farm tools.

- i. ii.

46. (a) Write down any four symbols of a school

- i. iii.

- ii. iv.

47. (a) What is a family?

.....
.....

(b) Mention the two types of families.

- i. ii.

(c) Give any one basic need of a family.

.....

48. (a) Write down any two tribes of people in your community.

- i. ii.

(b) Mention any two things which make culture.

- i. ii.

49. (a) Write down any two sources of water in your community

- i. ii.

(b) Give any two uses of water to man.

- i.

- ii.

50. Write down any two means of road transport.

- i. ii.

(b) Give any two causes of road accidents.

- i.

- ii.

For questions 51-55, answer Either Christianity Or Islam BUT not both.

51. Either: (a) Give any two ways how man communicates to God.

- i.

- ii.

(b) Give any two ways how God communicates to man.

- i.

- ii.

Or: (a) Give any two ways how man communicates to Allah.

- i.

- ii.

(b) Give any two ways how Allah communicates to man.

- i.

- ii.

52. Either: (a) Give one reason why God created man.

- i.

(b) Apart from man, mention other three creatures God created.

- i.

- ii.

Or: (a) Give one reason why Allah created man

.....

(b) Apart from man, mention other three creatures Allah created.

- i.

- ii.

53. Either: (a) write down any two ways how Christians can show love to the church.

i. ii.

(b) State any reasons why Christians go to church on Sunday.

i.

ii.

Or: write down any two ways how Muslims can show love to the Mosque.

i. ii.

(b) State any reasons why Muslims go to mosque on Friday.

i.

ii.

54. Either: (a) Mention any two gifts you can give to a child at birth.

i. ii.

(b) Mention any two gifts God gave to us.

i.

ii.

Or: Mention any two gifts you can give to a child at birth.

i. ii.

(b) Mention any two gifts Allah gave to us.

i.

ii.

55. Either: (a) On which mountain did Moses receive the Ten Commandments?

.....

(b) Mention any three of the Ten Commandments God gave to Moses.

i.

ii.

iii.

Or: On which mountain did Muhammad receive the Quran from?

.....

(b) Apart from the Quran, mention other three holy books in Islam.

i.

ii.

iii.

SUCCESS